

Name _____ Class _____

Friday 14th June 2024

Year 5 Maths Homework – Section C

Complete this jumbled grid

<i>x</i>	<i>7</i>	<i>8</i>	<i>11</i>	<i>2</i>	<i>4</i>	<i>12</i>	<i>10</i>	<i>3</i>	<i>6</i>	<i>5</i>	<i>9</i>	<i>1</i>	<i>0</i>
<i>5</i>													
<i>4</i>													
<i>7</i>													

Answer these questions

1) What $\frac{2}{5}$ of 40? _____

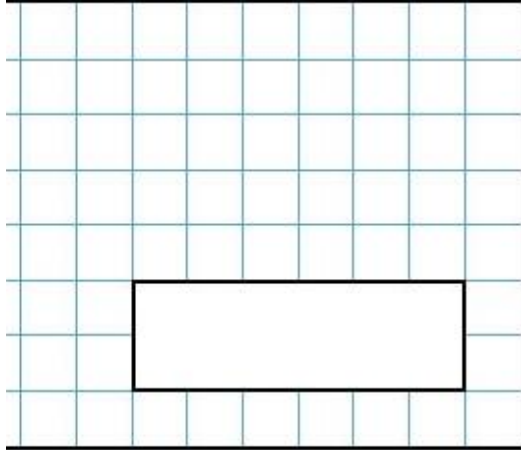
2) x 7 = 56

3) What is the product of 6 and 9? _____ Reminder: product means multiply

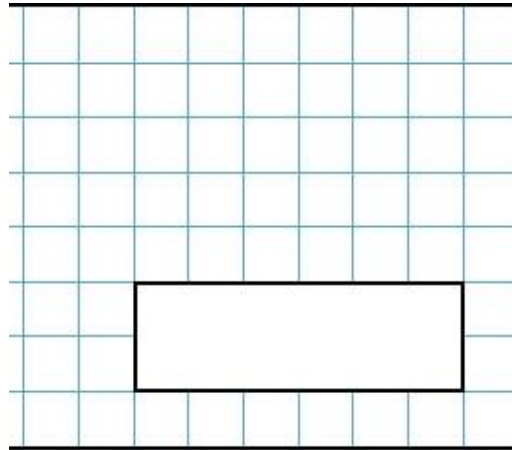
4) + 56 = 276 (5) 874 - = 45 (6) 500 ÷ 30 = _____

(7) 12 x 12 = _____ (8) 7^3 = _____ Reminder: 9^3 is 9x9x9 (not 9x3)

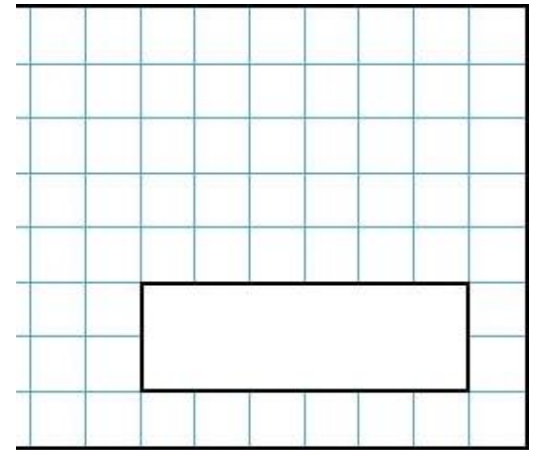
(9) $546.2 + 34.4$



(10) $653 \div 6$



(11) 8341×4



12) Multiplication Puzzles

The number in each square is the product of the connecting circles. Your job is to find the missing numbers.

